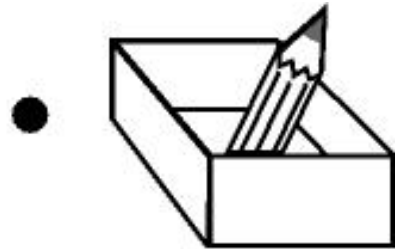


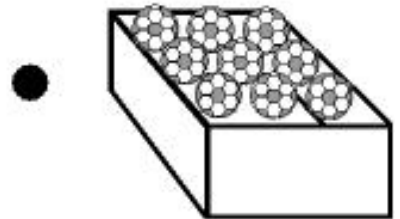
UNIR CON FLECHAS

UNE CON UNA FLECHA EL NÚMERO QUE CORRESPONDE A LA CANTIDAD DE OBJETOS QUE HAY EN CADA CAJA.

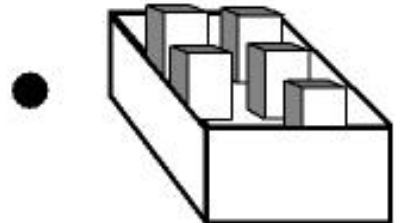
0 •



1 •



5 •



9 •

